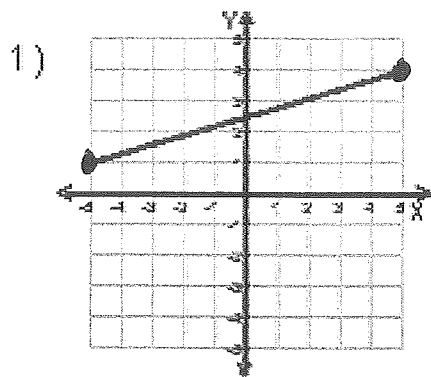


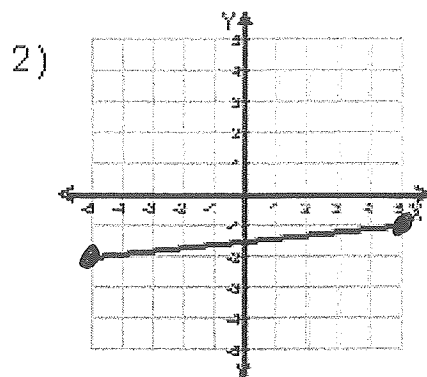
Name : _____ Score : _____

Teacher : _____ Date : _____

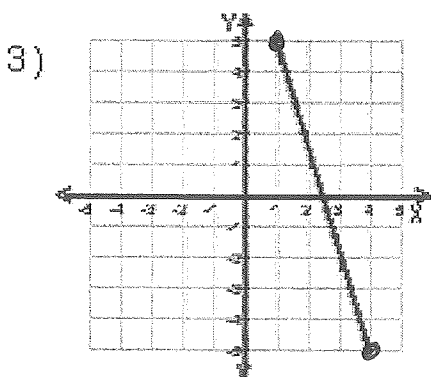
Find the Midpoint



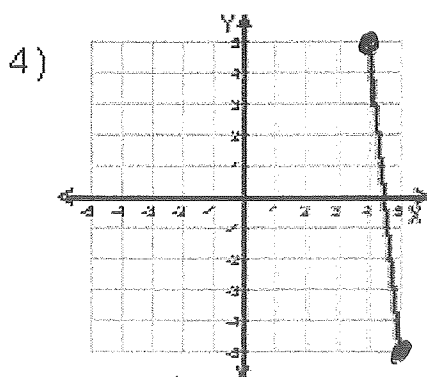
= _____



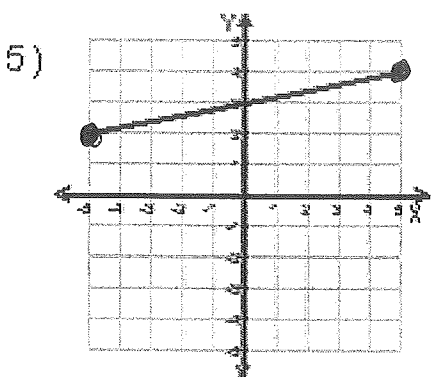
= _____



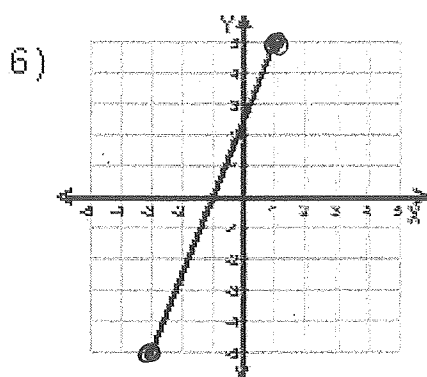
= _____



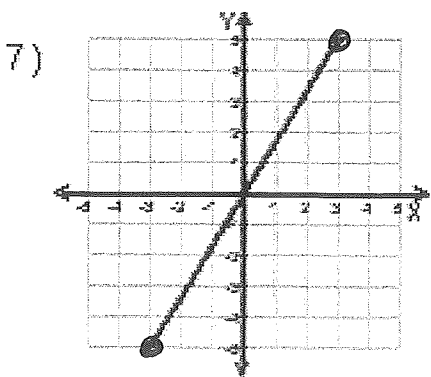
= _____



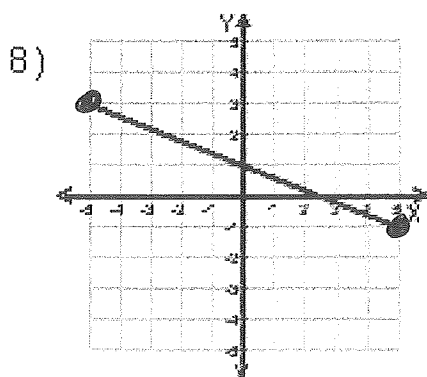
= _____



= _____



= _____



= _____



Find the other endpoint of the line segment with the given endpoint and midpoint. ****SHOW ALL YOUR WORK****

9. Endpoint: $(-1, 9)$, midpoint: $(-9, -10)$	10. Endpoint: $(2, 5)$, midpoint: $(5, 1)$
11. Endpoint: $(5, 2)$, midpoint: $(-10, -2)$	12. Endpoint: $(9, -10)$, midpoint: $(4, 8)$
13. Endpoint: $(-9, 7)$, midpoint: $(10, -3)$	14. Endpoint: $(-6, 4)$, midpoint: $(4, 8)$